




Count the Minibeasts



Add the Minibeasts and write the answer in the box



  +    =

 +  =

 +  =

 +  =

 +  =



Count the Minibeasts

Add the Minibeasts and write the answer in the box



$$\begin{array}{c} \text{6 black spiders} \\ + \\ \text{11 black spiders} \\ = \\ \square \end{array}$$

$$\begin{array}{c} \text{10 pink butterflies} \\ + \\ \text{5 green caterpillars} \\ = \\ \square \end{array}$$

$$\begin{array}{c} \text{15 orange bees} \\ + \\ \text{7 orange bees} \\ = \\ \square \end{array}$$

$$\begin{array}{c} \text{6 ladybugs} \\ + \\ \text{15 bees} \\ = \\ \square \end{array}$$

$$\begin{array}{c} \text{15 snails} \\ + \\ \text{8 snails} \\ = \\ \square \end{array}$$

